

BRIGIDA MORELLO CONVENT SCHOOL LUCKNOW

CLASS 2 MATHS

15.4.20

Worksheet 2020-21

Class - II

Subject - Mathematics

1. Write the number names

a) 504 -

b) 510 -

c) 515 -

d) 526 -

e) 532 -

f) 546 -

g) 550 -

h) 562 -

i) 571 -

j) 584 -

k) 596 -

l) 600 -

BRIGIDA MORELLO CONVENT SCHOOL LUCKNOW

3. Learn and write the table of 5 and 6

Table of 5

$$5 \times 1 = 5$$

$$5 \times 2 = 10$$

$$5 \times 3 = 15$$

$$5 \times 4 = 20$$

$$5 \times 5 = 25$$

$$5 \times 6 = 30$$

$$5 \times 7 = 35$$

$$5 \times 8 = 40$$

$$5 \times 9 = 45$$

$$5 \times 10 = 50$$

Table of 5

Table of 6

$$6 \times 1 = 6$$

$$6 \times 2 = 12$$

$$6 \times 3 = 18$$

$$6 \times 4 = 24$$

$$6 \times 5 = 30$$

$$6 \times 6 = 36$$

$$6 \times 7 = 42$$

$$6 \times 8 = 48$$

$$6 \times 9 = 54$$

$$6 \times 10 = 60$$

Table of 6

BRIGIDA MORELLO CONVENT SCHOOL LUCKNOW

2. Write the number (in figures)

a) Two hundred thirty-nine - _____

b) Four hundred sixty-seven - _____

c) Two hundred one - _____

d) Three hundred-twelve - _____

e) Five hundred - _____

3. Fill in the missing numbers in order

a) 340 _____ 345

b) 756 _____ 761

c) 605 _____ 611

d) 250 _____ 254

BRIGIDA MORELLO CONVENT SCHOOL LUCKNOW

Things We Know

Hi! Welcome to the new class!
First let us go over things you know.



1. Write 1 to 100.

2. Write the number names.

a. 25	twenty-five	b. 7		c. 19	
d. 4		e. 14		f. 12	
g. 36		h. 28		i. 15	
j. 43		k. 17		l. 50	

1


3. Carry on the pattern.





BRIGIDA MORELLO CONVENT SCHOOL


LUCKNOW


3. Carry on the pattern.

a.  15 17 19

b.  28 30 32

c.  44 43 42

d.  20 30 40

e.  15 20 25

4. Write in words.

a. 60 b. 70 c. 80

d. 53 e. 66 f. 73





g. 78 h. 69 i. 34

i. 90 k. 92 l. 100

















BRIGIDA MORELLO CONVENT SCHOOL

LUCKNOW

5. Write what comes before and after:

- a.  9  b.  7  c.  14  d.  19 
- e.  34  f.  22  g.  43  h.  56 
- i.  30  j.  59  k.  67  l.  78 
- m.  45  n.  50  o.  89  p.  95 

6. Write the number between:



- a. 10  12 b. 14  16 c. 19  21 d. 25  27
- e. 32  34 f. 29  31 g. 38  40 h. 51  53
- i. 56  58 j. 62  64 k. 64  66 l. 70  72
- m. 67  69 n. 84  86 o. 93  95 p. 97  99

7. Fill in.

- a. The number before 23 is 22.
- b. The number after 39 is _____.
- c. The number before 70 is _____.
- d. The number after _____ is 43.
- e. The number before 61 is _____.
- f. 34 is between _____ and 35.
- g. 97 is between 96 and _____.
- h. _____ is between 68 and 70.
- i. _____ is between 19 and 21.
- j. _____ is between 76 and 78.

BRIGIDA MORELLO CONVENT SCHOOL

LUCKNOW



4 tens and 2 ones make 42.
 $40 + 2 = 42$



2 tens and 3 ones make 23.
 $20 + 3 = 23$

8. Write in the short form.


- a. $30 + 7 =$ 37
- b. $20 + 5 =$
- c. $10 + 8 =$
- d. $50 + 3 =$
- e. $70 + 7 =$
- f. $40 + 6 =$
- g. $90 + 5 =$





9. Write in the expanded (long) form.


- a. $53 =$ 50 + 3
- b. $42 =$
- c. $26 =$
- d. $17 =$
- e. $83 =$
- f. $66 =$
- g. $35 =$


10. Fill in.


a. 
 ___ tens + ___ ones = ___

b. 
 ___ tens + ___ ones = ___

c. 
 ___ tens + ___ ones = ___

d. 
 ___ tens + ___ ones = ___

e. 
 ___ tens + ___ ones = ___

f. 
 ___ tens + ___ ones = ___